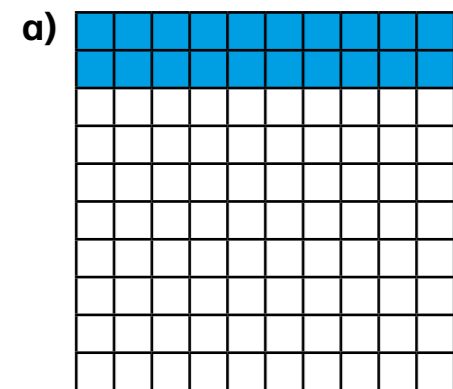


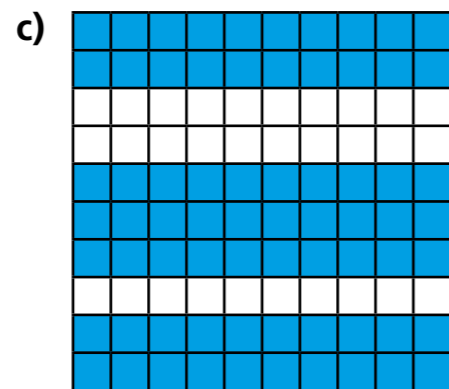
Recognise tenths and hundredths

1 The hundred square represents 1 whole.

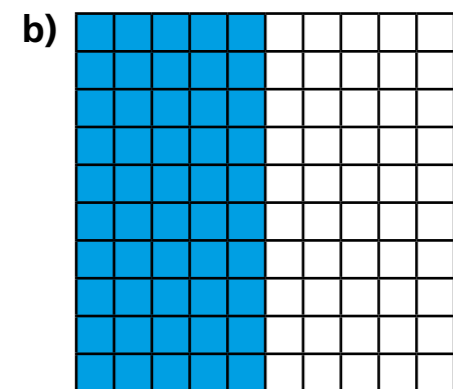
What fraction of each hundred square is shaded?



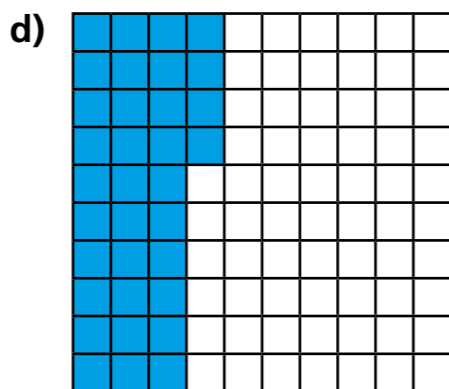
$$\frac{1}{5}$$



$$\frac{7}{10}$$




$$\frac{1}{2}$$



$$\frac{17}{50}$$

2 Here is a hundred square.



What fraction of the whole does each represent?

a) 4 full rows = $\frac{4}{10}$

b) 6 full columns = $\frac{6}{10}$

c) 13 squares = $\frac{13}{100}$

d) 2 full rows and 5 squares = $\frac{25}{100}$

e) 3 full columns and 8 squares = $\frac{38}{100}$

3 Complete the sentences.

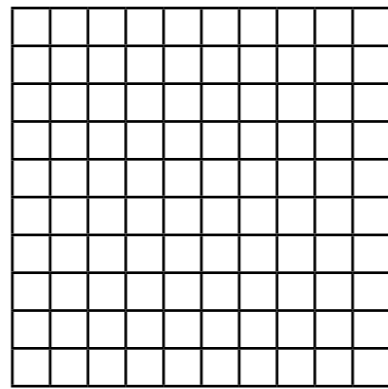
a) 4 tenths is equivalent to 40 hundredths.

b) 70 hundredths is equivalent to 7 tenths.

c) 5 tenths is equivalent to 50 hundredths or 1 half

4

One row is one tenth and one column is one tenth, so if I colour one row and one column on my hundred square I will have shown 2 tenths.



Is Dexter correct? No

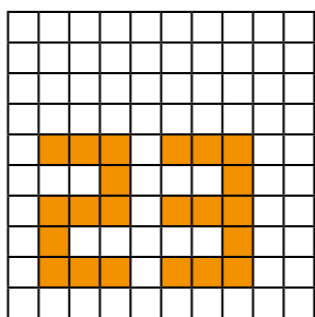
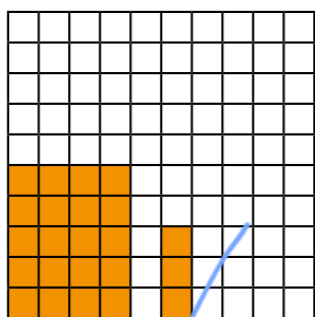
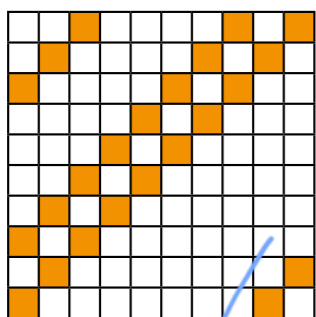
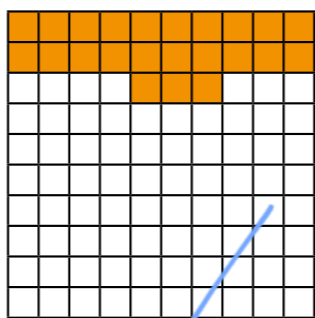
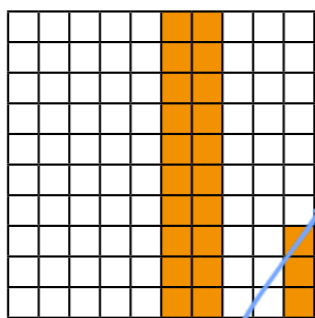
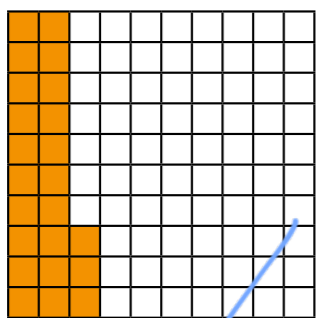
Explain your answer.

You may use the hundred square to help you.

There would only be 19 squares shaded.

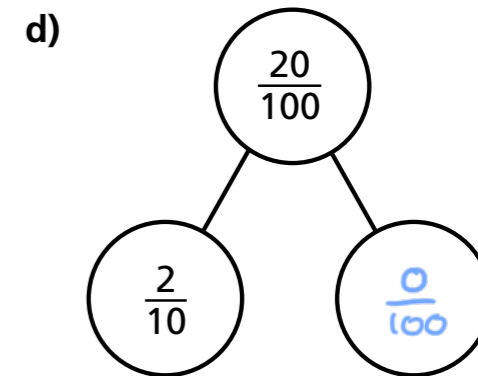
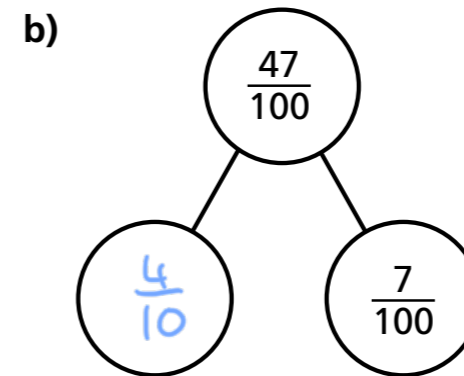
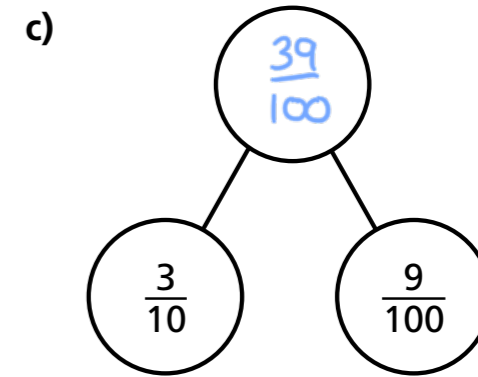
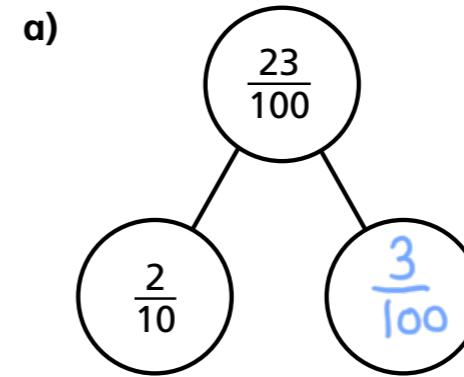
5

Tick the hundred squares with $\frac{23}{100}$ shaded.



6

Complete the part-whole models.



7



$$\frac{73}{100} = \frac{7}{10} + \frac{3}{100}$$

Annie



$$\frac{73}{100} = \frac{6}{10} + \frac{13}{100}$$

Ron

Who is correct? Both

How many ways can you partition $\frac{73}{100}$?